
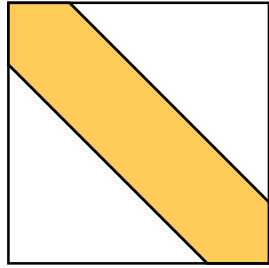


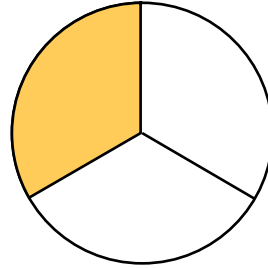
1 $\frac{1}{3}$ のものに ○、ちがうものに × をつけましょう。



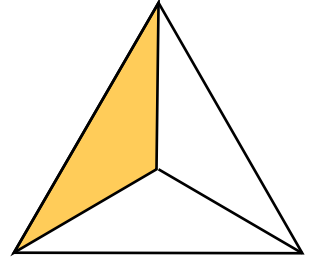
(○ ・ ×)



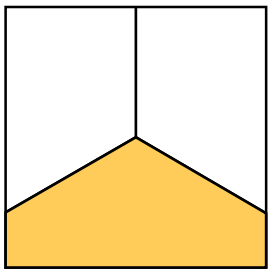
(○ ・ ×)



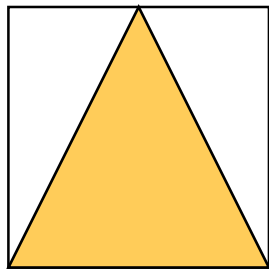
(○ ・ ×)



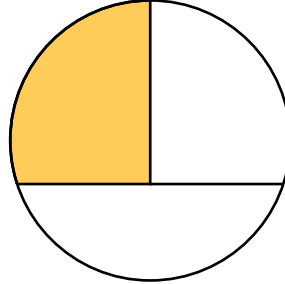
(○ ・ ×)




(○ ・ ×)



(○ ・ ×)



(○ ・ ×)



(○ ・ ×)

2 ^{とうぶん}三等分に ^{じぶん}なるように ^{せん}自分で ^ひ線を ^ひ引いてみましょう。

