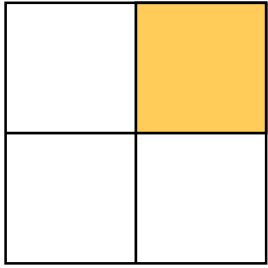
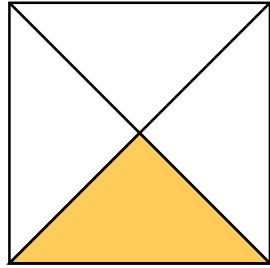


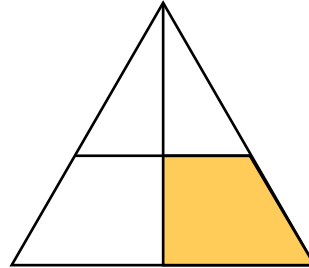
1 $\frac{1}{4}$ のものに ○、ちがうものに × をつけましょう。



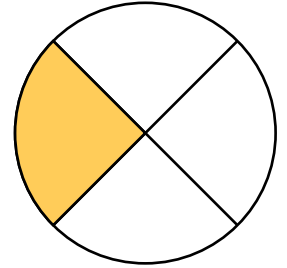
(○ ・ ×)



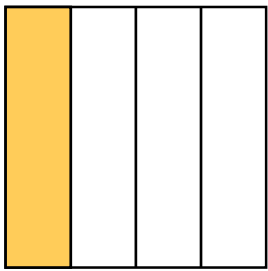
(○ ・ ×)



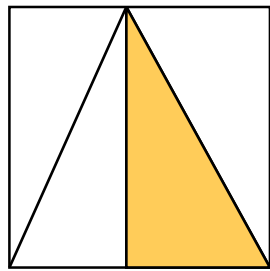
(○ ・ ×)



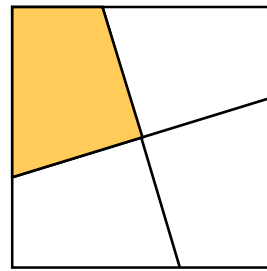
(○ ・ ×)



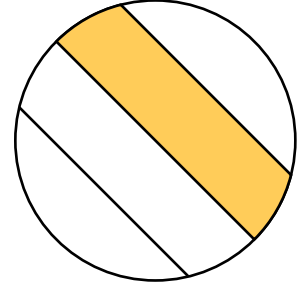
(○ ・ ×)



(○ ・ ×)



(○ ・ ×)



(○ ・ ×)

2 ^{とうぶん}四等分になるように ^{じぶん}自分で ^{せん}線を ^ひ引いてみましょう。

